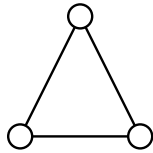
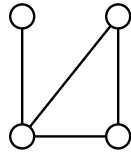


## 1. GRAPHS AND COLORINGS

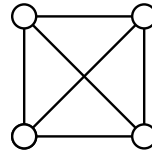
**Definition.** A *graph* is a collection of vertices, and edges between them. They are often represented by a drawing:



3 vertices  
3 edges



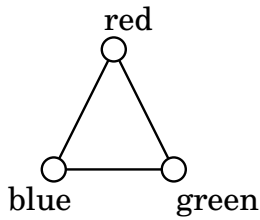
4 vertices  
4 edges



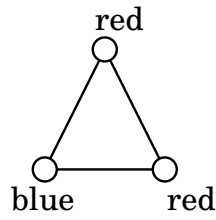
4 vertices  
6 edges

A *graph coloring* assigns a color to each vertex, in a way so that no edge has both vertices the same color.

**Example.**



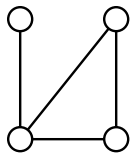
**Good**



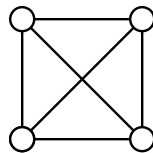
**Bad**

The figure on the left is a graph coloring, but the figure on the right is not. Why not?

**Question.** Find a graph coloring of



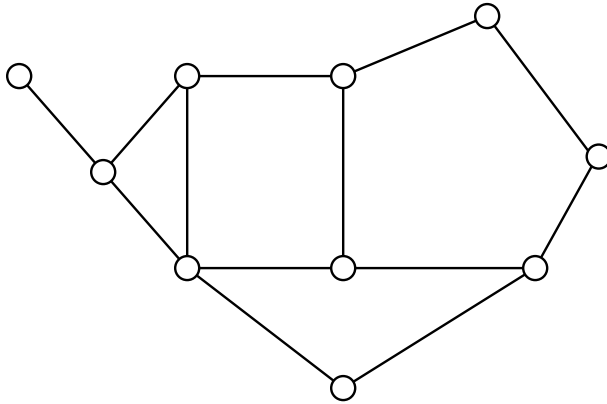
and



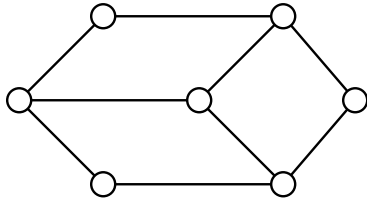
What is the least number of colors you can use?

## 2. MORE COLORINGS

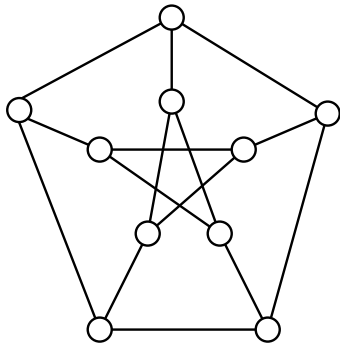
**Question.** *Color this graph. Try to use as few colors as possible.*



**Question.** *Color this graph. Can you do it with 2 colors?*



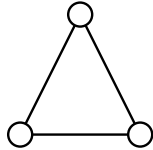
**Question.** *Color this graph. What is the least number of colors you can use?*



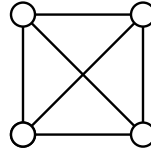
### 3. COMPLETE GRAPHS

**Definition.** A *complete graph* has an edge between every 2 vertices. It's called complete, because you can't add any more edges.

The complete graph with  $n$  vertices is called  $K_n$ . So  $K_3$  is



and  $K_4$  is



**Question.** Draw  $K_5$  and  $K_6$ .

**Question.** What is the least number of colors to color  $K_n$ ? Try it with  $K_3$ ,  $K_4$ , and  $K_5$ !

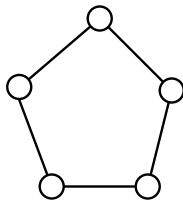
**Question.**  $K_n$  has  $n$  vertices. How many edges does it have?

#### 4. CHROMATIC NUMBER

**Definition.** The least number of colors needed to color a graph  $G$  is called the *chromatic number* of that graph.

**Question.** What is the chromatic number of  $K_n$ ?

A cyclic graph can have its vertices arranged in a circle, with edges only on the outside. For example, the cyclic graph with 5 vertices is:



The cyclic graph with  $n$  vertices is called  $C_n$ .

**Question.** What is the chromatic number of  $C_n$ ? Try it with  $C_3$ ,  $C_4$ , and  $C_5$ !

**Question.**  $C_n$  has  $n$  vertices. How many edges does it have?

## 5. GRAPHS WITH NO ODD CYCLES

*Notation.* Sometimes we use the greek letter  $\chi$  (chi) to represent the chromatic number of a graph  $G$ , so that

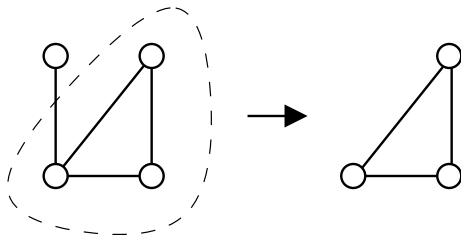
$$\chi(G) = \text{the chromatic number of } G.$$

You just showed that the chromatic number  $\chi(C_n)$  of  $C_n$  is

$$\chi(C_n) = \begin{cases} 2 & n \text{ even} \\ 3 & n \text{ odd} \end{cases}.$$

**Definition.** An *induced subgraph* of a graph is a subset of vertices, with all the edges between those vertices that are present in the larger graph.

**Example.**



**Question.** If a graph  $G$  has no induced subgraph which is an odd cycle, is the chromatic number  $\chi(G) = 2$ ? Explain why, or give an example where this is not true.

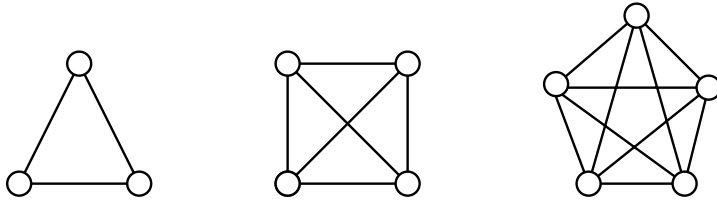
**Definition.** A graph with chromatic number 2 is called a *bipartite graph*.

This is because we can partition the vertices into two (bi) classes.

I guess you could call a graph with chromatic number 3 a *tripartite graph*, but for some reason, graph theorists don't usually do that.

## 6. CHROMATIC NUMBER AND CLIQUES

**Remember** that  $K_n$  is the complete graph on  $n$  vertices – the graph with  $n$  vertices, and all edges between them. You showed on Sheet 4 that the chromatic number of  $K_n$  is  $n$ .



**Question.** Show that if  $G$  has an induced subgraph which is a complete graph on  $n$  vertices, then the chromatic number is at least  $n$ . I.e.,  $\chi(G) \geq n$ .

**Definition.** An induced subgraph which is complete is called a *clique*, since it's a small group where every vertex “talks to” every other vertex.

**Question.** If the largest clique in  $G$  has  $n$  vertices, is the chromatic number necessarily equal to  $n$ ? Explain why, or give an example where this is not true.

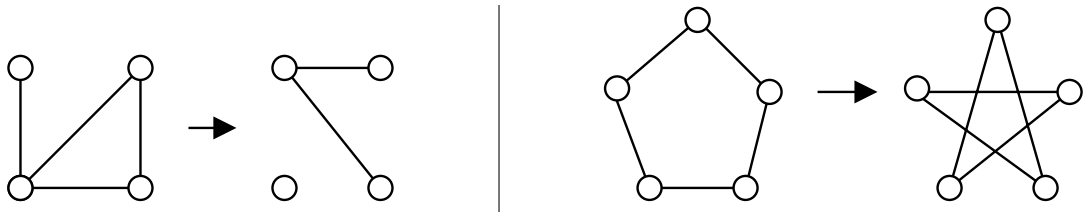
## 7. PERFECT GRAPHS

**Definition.** A graph  $G$  where the chromatic number is equal to the size of the largest clique in  $G$  is called a *perfect graph*.

You probably showed on Sheet 6 that an odd cycle is not a perfect graph, since the largest clique in any cycle has 2 vertices (is an edge), but the chromatic number of an odd cycle is 3.

**Definition.** If  $G$  is any graph, then the *complement graph* of  $G$  is the graph with the same vertices, and an edge between two vertices if and only if there is no edge in  $G$ . This is best seen with some examples:

**Examples.**



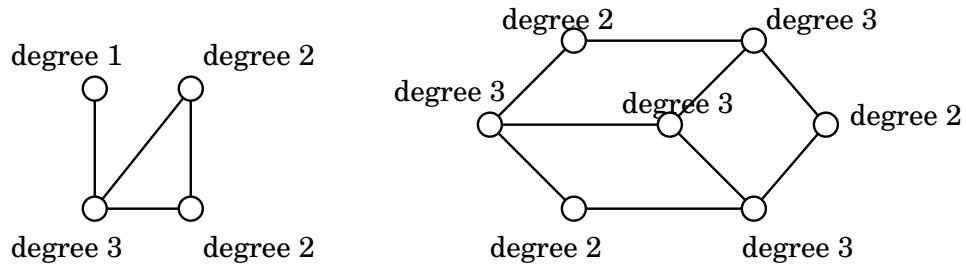
**Question.** Draw the complement graph of  $C_7$ . What is the largest clique? Show that this graph is not perfect.

It is a famous (and very difficult!) theorem, called the Strong Perfect Graph Theorem, that a graph is perfect if and only if no induced subgraph is either an odd cycle of length  $\geq 5$  or the complement graph of an odd cycle of length  $\geq 5$ .

## 8. DEGREE

**Definition.** The *degree* of a vertex in a graph is the number of edges which have that vertex as an endpoint.

### Examples.



Notice that in both of those examples, if you add up the degrees of all the vertices, you get an even number.

**Question.** Does every vertex of odd degree have a neighbor of odd degree? Explain why this is always true, or give an example where it is not.

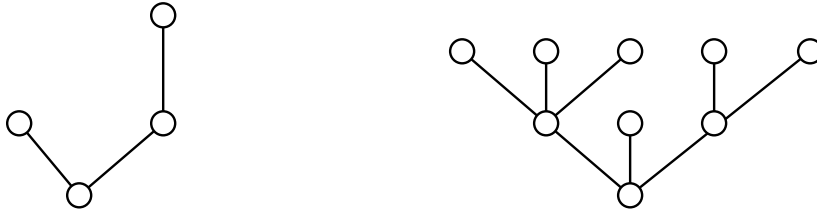
**Question.** Is the sum of the degrees of all vertices in a graph always even? Explain why this is always true, or give an example where it is not.



## 9. TREES

**Definition.** A *tree* is a connected graph which contains no induced cycles. A *leaf* is a vertex with degree 1, i.e., with only one edge.

**Examples.**



**Question.** *Does every tree have a leaf?*

**Question.** *What is the chromatic number of a tree?*

**Question.** *How many edges does a tree have?*

**Question.** *Do trees have to be perfect graphs? (Remember that a perfect graph has chromatic number equal to the size of its largest complete subgraph.)*

## 10. CONSTRUCTING EXAMPLES

You'll have to work hard to answer these questions!

**Question.** Find a graph  $G$  with no induced subgraph  $K_4$  (i.e., no 4 vertices which are all adjacent to one another), such that  $\chi(G) = 4$ .

**Question.** Find a graph  $G$  with no induced triangle, such that  $\chi(G) = 4$ .

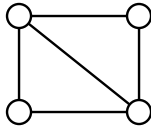
## 11. CHORDAL GRAPHS AND CUT-SETS

**Definition.** A *chordal graph* is one that has no induced cycles of size greater than 3.

So a chordal graph can have triangles, but any larger cycle has some “chords” across it, which will break it up into triangles.

### Examples.

- (1) Any complete graph  $K_n$ .
- (2) Any tree.
- (3) The following graph, and many others like it:



**Definition.** A set of vertices is a *cut-set* for a graph  $G$  if removing the vertices disconnects  $G$ . That is, if removing the vertices leaves several subgraphs, with no edges in between them.

**Example.** Removing both vertices of the diagonal edge in Example (3) above disconnects the graph, so the diagonal edge is a cut-set for this graph.

**Question.** Does the complete graph  $K_n$  have any cut-set? If so, describe the cut-set. If not, then explain why not.

**Question.** Does a tree have any cut-set? If so, describe the cut-set. If not, then explain why not.

## 12. MORE CHORDAL GRAPHS

You'll have to work hard to answer these questions!

**Question.** *Show that if  $G$  is a chordal graph, but not a complete graph, then the smallest cut-set for  $G$  forms a complete subgraph.*

**Question.** *Using the fact from the above question, show that chordal graphs are perfect.*