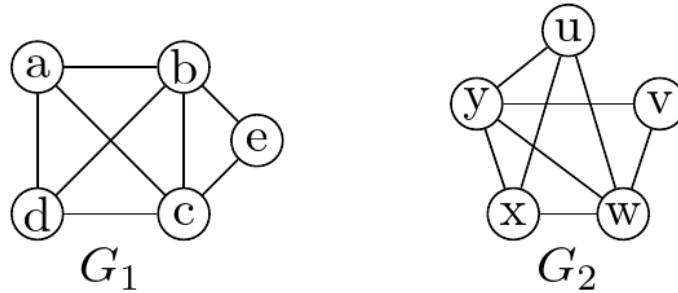


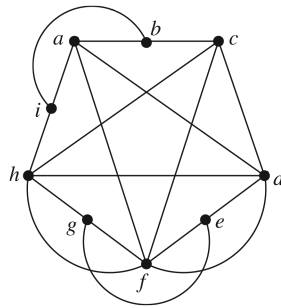
25 Planar Graphs and the Chromatic Number of a Graph

120. Consider the following two graphs:

- (i) Are they isomorphic to each other?
- (ii) Are they planar?

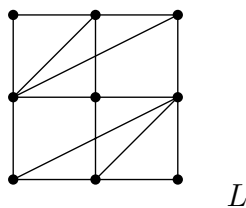


121. We are given a graph G :



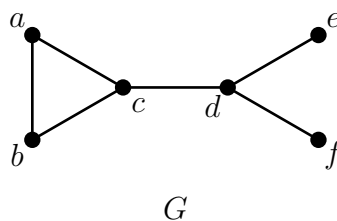
- (a) For the graph G in the figure, provide an example of an induced subgraph that is not bipartite and has 5 vertices.
- (b) Is G planar?
- (c) Determine the chromatic number of the graph G .

122. We are given a graph L :



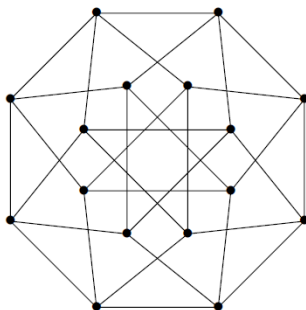
- (a) Is the graph L planar? Justify your answer.
- (b) Find the chromatic number of the graph L .
- (c) Is $\chi(L, 2) > 0$? Is $\chi(L, 3) > 0$? Is $\chi(L, 4) > 0$? Justify your answers.

123. Consider the following graph G :



- (a) Find all isomorphisms of the graph G onto itself (i.e., automorphisms of the graph G).
- (b) Determine the chromatic number of the graph G and calculate its chromatic polynomial $\chi(G, t)$.

124. Consider the following graph:



- (a) Is it possible to draw this graph without lifting the pen from the paper, never retracing an edge, and starting and ending at the same vertex?
- (b) Find the chromatic number of the given graph.
- (c) Show that the graph is not planar.

125. (a) Find two 4-vertex graphs with different chromatic polynomials.

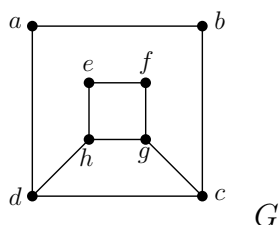
(b) Find two non-isomorphic 4-vertex graphs with the same chromatic polynomial.

(c) Prove that the number of ways to properly color a cycle C_n with $n \geq 3$ vertices using t colors is:

- $(t - 1)[(t - 1)^{n-1} + 1]$ if n is even.
- $(t - 1)[(t - 1)^{n-1} - 1]$ if n is odd.

26 Different math problems

126. Consider the following graph G :



- (a) Is G an Eulerian graph?
- (b) Does G contain an Eulerian trail?
- (c) Is G Hamiltonian?
- (d) Determine the chromatic number of the graph G .

127. A **wheel graph** W_n for $n \geq 4$ is a graph with n vertices consisting of a cycle C_{n-1} (called the *outer cycle*) and an additional central vertex that is adjacent to every vertex in the cycle.

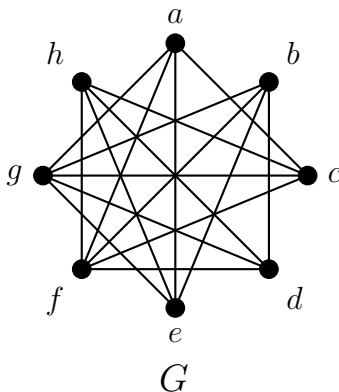
- Draw the wheel graphs W_4, W_5, W_6 , and W_7 . Start with the outer cycle, then add the central vertex, and connect it to each vertex in the cycle.
- For which $n \geq 4$ is W_n an Eulerian graph? For which $n \geq 4$ does W_n have an Eulerian trail?
- For which $n \geq 4$ is W_n Hamiltonian?
- Show that there exists an orientation of the edges of W_n such that the absolute difference between the in-degree and out-degree of each vertex is at most one.

128. Let W_n be the wheel graph from the previous problem (see Problem 127).

- Calculate the clique number $\omega(W_n)$ of the graph W_n (the size of the largest complete subgraph in W_n).
- Find the chromatic number $\chi(W_n)$ of the graph W_n .
- Show that the chromatic polynomial of W_n is given by:

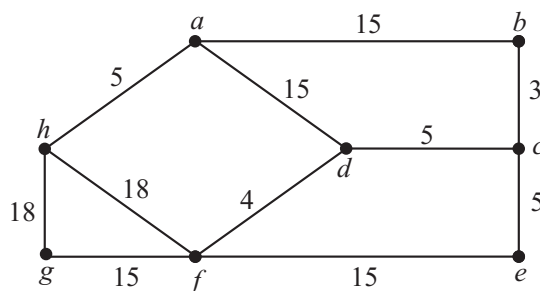
$$\chi(W_n, t) = t((t-2)^{n-1} - (-1)^n(t-2)).$$

129. Consider the graph G below and answer the questions. Justify your answers.



- Is G Hamiltonian?
- Is G connected?
- Is G an Eulerian graph? Does it contain an Eulerian trail?
- Is G planar?
- Determine $\chi(G)$.

130. Let G be the following weighted graph:



- (i) Use Kruskal's greedy algorithm to find a minimum spanning tree of G and specify its total weight. Outline the steps of the algorithm.
- (ii) Determine whether the tree found in the previous part is unique, i.e., whether another spanning tree with the same weight can be obtained using Kruskal's method.
- (iii) Is G an Eulerian graph? If yes, write the corresponding trail; if no, provide a justification.
- (iv) Is G Hamiltonian? Does G have a Hamiltonian path? If yes, specify the cycle/path; if no, justify your answer.
- (v) Calculate $\chi(G)$.

All above math problems are taken from the following website:

<https://osebje.famnit.upr.si/~penjic/teaching.html>.

THE READER CAN FIND ALL SOLUTIONS TO THE GIVEN PROBLEMS ON THE SAME PAGE.